


Year 1 Shielding Pack

English	Maths
<ul style="list-style-type: none">- Read <i>The Zoo Vet</i> story together- Reading comprehension on <i>The Zoo Vet</i><ul style="list-style-type: none">- My favourite zoo animal	<ul style="list-style-type: none">- Fractions- Multiplication- Maths mats
Topic	
Art – Andy Goldsworthy activities	

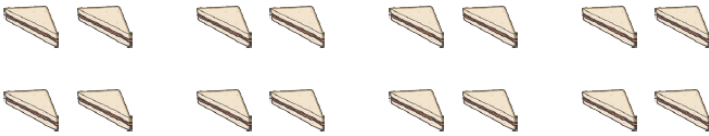
Picnic Time Multiplication

1. 5 children are on a picnic. Each child eats 2 apples. How many apples are eaten?




Answer:

2. 8 children are on a picnic. Each child eats 2 sandwiches. How many sandwiches are eaten?



Answer:

3. 3 children are on a picnic. Each child eats 5 biscuits. How many biscuits are eaten?



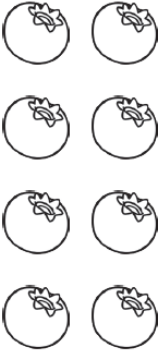


Answer:




Summer Fruits Fractions

Colour the correct fractions of the fruits.

For each group of summer fruits, colour in $\frac{1}{2}$.

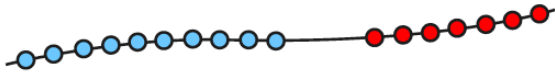
		
---	---	---

For each group of summer fruits, colour in $\frac{1}{4}$.

		
--	--	--

Section 1

Write a number sentence to show how many beads there are altogether.



Section 3

If today is Tuesday, what day was it 2 days ago?

Put a circle around the correct day.

Wednesday Sunday Saturday

Section 4

Imagine seeing 3 elephants at the zoo.

How many legs would you see?

Section 2

Draw and colour the next 3 cars in the pattern.

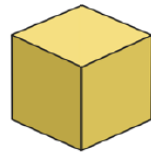


Section 5

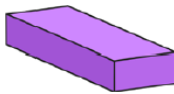
Draw lines to match the name and the shape.



cube



sphere




triangular prism



cuboid


Section 6

Which jug is half full?
Tick the correct one.



Section 7

Make this clock show quarter past 8.



Section 8

How much money is here?



Section 1

I have 3 pairs of shoes.

How many shoes is that altogether?



Section 2

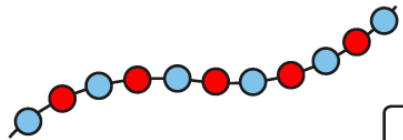
Shep had 3 dog biscuits.

Rover had 5. How many more biscuits did Rover have?



Section 3

Count the beads and write the number.



Section 4


I lose 5p from the money pictured below.

How much money have I got left?



Section 5

Cut the cake into quarters.




Section 6

What numbers are missing?

10	8	6			0
----	---	---	--	--	---

Section 7

What time is it?



3 o'clock

quarter past 7

quarter to 3

Section 8

Complete the number pairs:

