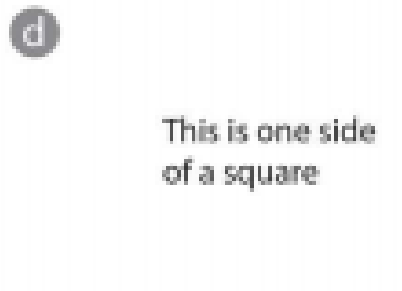


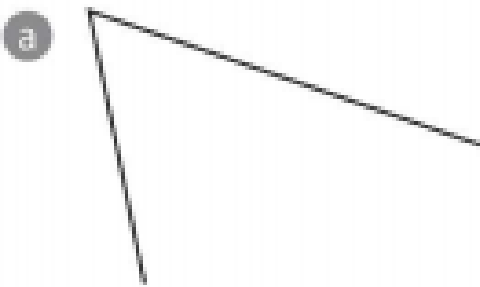


Draw 2-D shapes

1 Use your ruler to complete each rectangle.



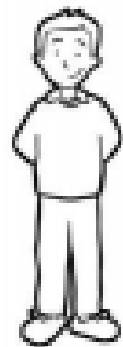
2 Now complete the triangles.



3 Use a ruler to draw each shape. Each shape must have at least one side measuring 4 cm.

a a quadrilateral, which is not a rectangle

b a pentagon



1) What is £3 and 50p + £2 and 35p?

2) You buy 7 croissants for 50p each. You pay for your croissants with a £10 note. How much change do you get back?

3) If you buy £3.20 worth of sweets and pay with a £5 note, how much change will you get?

Time

afternoon afternoon morning evening

What time does each clock show?

Clock A Clock B

What time is on Clock A ? _____

What time is on Clock B ? _____

How much time has elapsed between Clock A and B ? _____

1) Kim wakes up at 6 am, her brother wakes up 3 hours after her. Their mum wakes up 2 hours before her brother. What time does her mum wake up?